

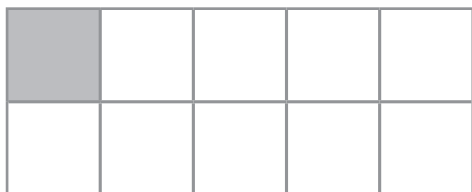
scheda

**3**

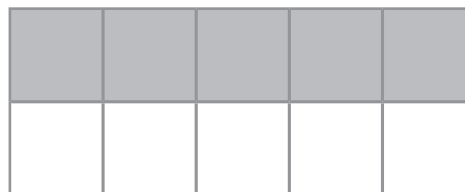
NOME .....

CLASSE .....

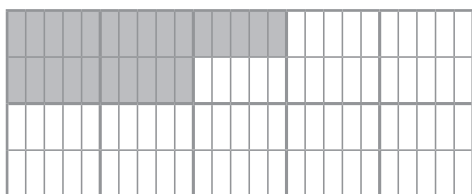
**1.** Osserva i disegni e scrivi la frazione e il numero decimale rappresentato.




.....  
——— → .....  
.....



.....  
——— → .....  
.....



.....  
——— → .....  
.....



.....  
——— → .....  
.....

**2.** Cerchia il disegno che rappresenta 17 centesimi.

