

scheda

**1**

NOME .....


CLASSE .....

**1. Esegui le moltiplicazioni. Aiutarti con lo schema e fai disegni.**

**12 x 13 =**

12 x 3 = .....

12 x 10 = ..... +




h	da	u	
			X
	—	—	=
	—	—	+
	—	—	=
—	—	—	
—	—	—	

**19 x 11 =**

..... x ..... = .....

..... x ..... = ..... +




h	da	u	
			X
	—	—	=
	—	—	+
	—	—	=
—	—	—	
—	—	—	

**11 x 18 =**

..... x ..... = .....

..... x ..... = ..... +



h	da	u	
			X
	—	—	=
	—	—	+
	—	—	=
—	—	—	
—	—	—	