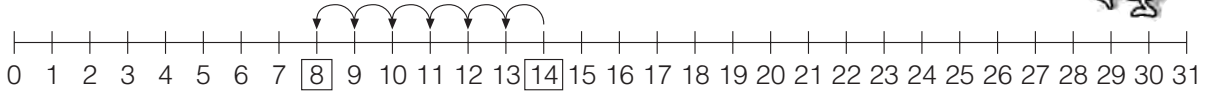
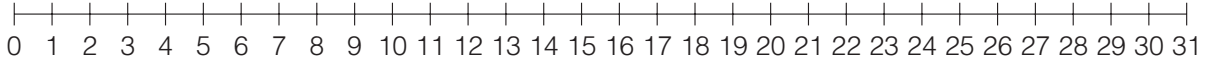


# Sulla linea dei numeri

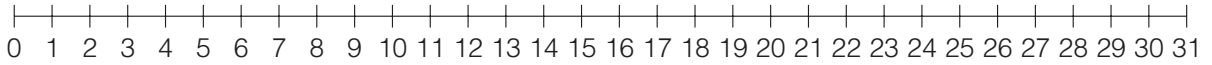
① - Esegui le sottrazioni sulla linea dei numeri, come nell'esempio.



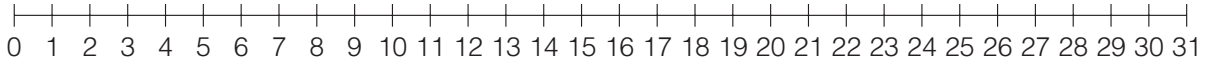
$$14 - 6 = 8$$



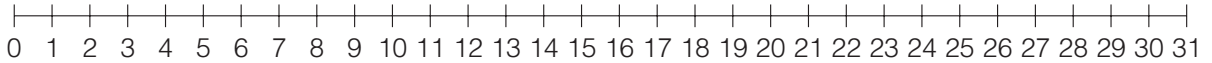
$$18 - 8 = \dots$$



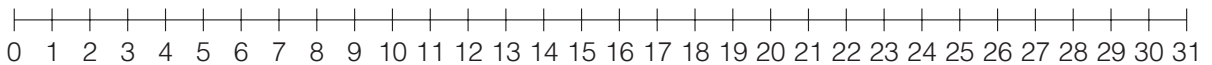
$$20 - 5 = \dots$$



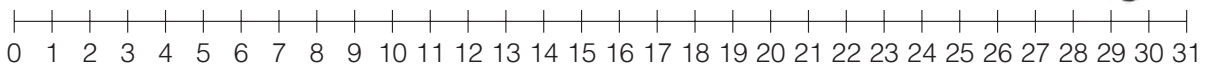
$$24 - 4 = \dots$$



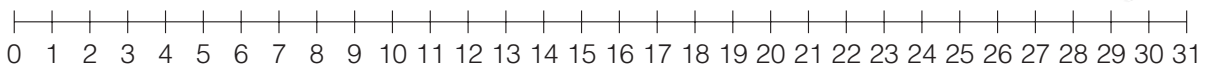
$$27 - 6 = \dots$$



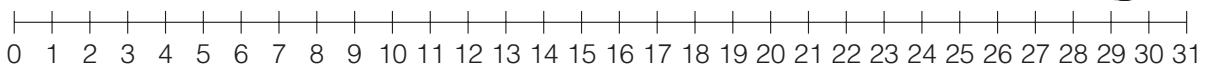
$$19 - \dots = 11$$



$$21 - \dots = 14$$



$$30 - \dots = 16$$



$$31 - \dots = 12$$